

MILESTONE ACADEMY
2023 - 2024
VACATION HOME WORK
CLASS – 2

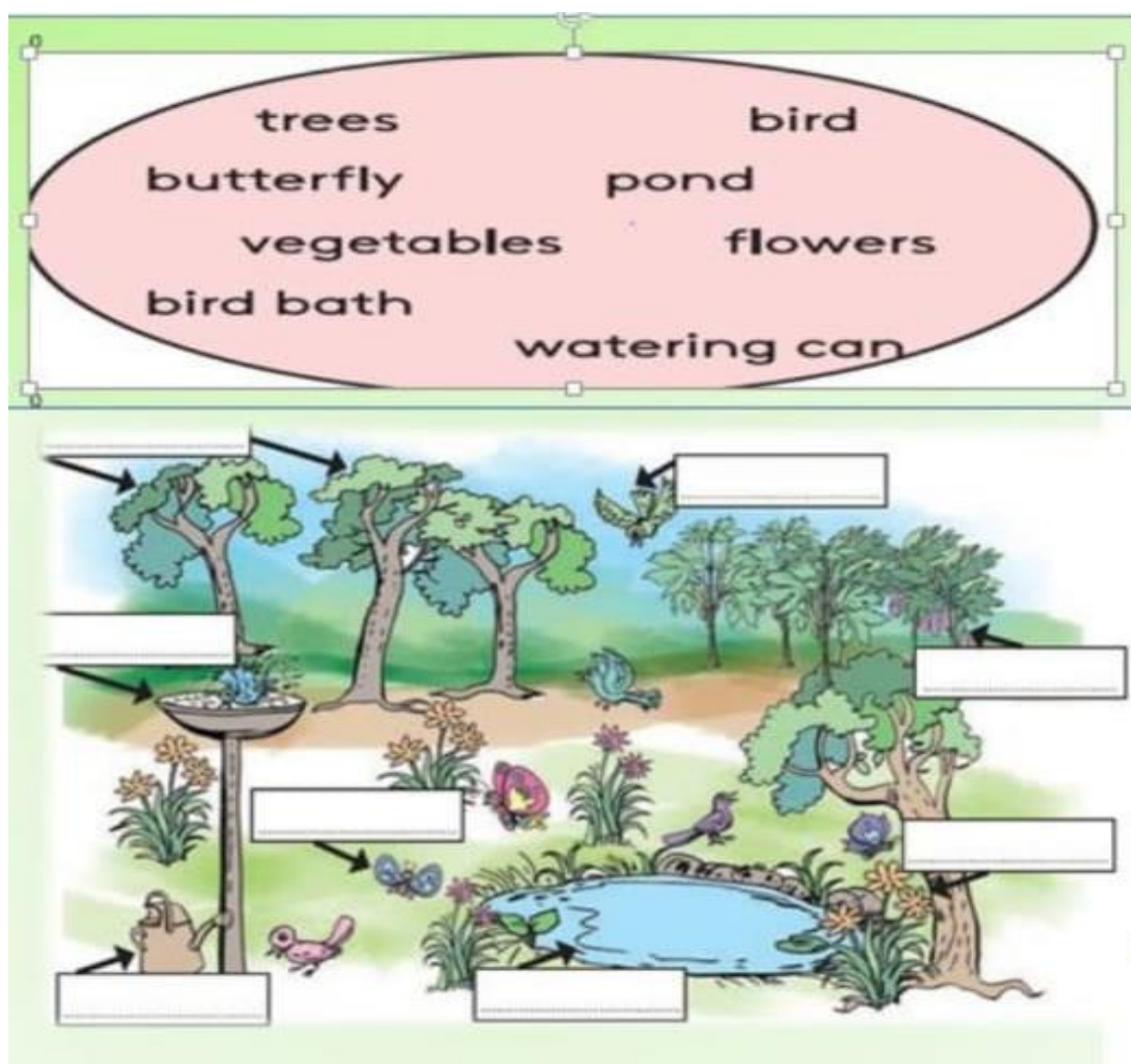
DATE OF SUBMISSION- 15.06.23

NOTE:-

1. The Vacation Home Work is to help your child to be busy . The Work will be assessed after submission.
2. All the work of every subject has to be done in a Single Note Book . Drawings of every subject & Craft Work to be done in the chart papers & stapled together.

ENGLISH

1. Label the picture with the help of the words given below :-



2. **Read the sentences and circle the nouns:**

1. Seema and Rana are dancing.



2. The monkey is on the tree.

3. Raj is in Kerala.



4. The car is red.



5. The book is on the table.

3. **Choose the nouns from the box and write them in the correct column:**

pen school brother lion park cat book Ali

PERSONS:

1. _____

2. _____



PLACES:

1. _____


2. _____



ANIMALS:

1. _____


2. _____



THINGS:

1. _____

2. _____






a b c d e f g h i j k l m n o p q r s t u v w x y z

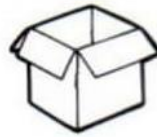
Hidden Nouns

4.

Directions: Find the name for each picture in the puzzle below. Write it on the line.

b	o	o	k	b
t	e	n	t	o
s	h	i	p	x
c	r	i	n	g
o	b	a	b	y
w	d	u	c	k




















HINDI

1. अक्षर को मिलाकर शब्द बनाइए।



2. गिनतियों को आपस में जोड़कर चित्रपूरा कीजिए।



3. खाली स्थान में वर्ग का पहला, तीसरा व आखिरी वर्ण लिखो :-

— थ — ध —

— ख — घ —

— फ — भ —

— छ — झ

4. स्वर और व्यंजन को छाँटकर अलग करो और उसे लगाओ:-



स्वर : _____

व्यंजन : _____

5. सही शब्दों से वाक्य पूरा करो -

(काला, पीला, लाल, सफेद, भूरा, नीला, नारंगी)

कौए का रंग _____ होता है ।

संतरा का रंग _____ होता है ।

दूध का रंग _____ होता है ।

टमाटर का रंग _____ होता है ।

सूरजमुखी के फूल का रंग _____ होता है ।

गौरैया का रंग _____ होता है ।

दिन में आसमान _____ रंग का होता है।

6. सही शब्द चुनकर वाक्य पूरे कीजिए

जौनपुर, गोल, रेलगाड़ी, चूहा खेल नैनीताल

1 वे _____ से देहरादून गए !

2 मौसी _____ से आई है !

3 जोकर की नाक _____ है !

4 _____ कूदकर भागा !

5 शैला _____ में रहती है !

6 भालू का _____ देखा !

MATHS

1. Add the following:-























The worksheet contains 15 addition problems arranged in a 3x5 grid. Each problem is in a colored box with a cartoon character nearby. The problems are:

 $\begin{array}{r} 78 \\ + 15 \\ \hline \end{array}$	$\begin{array}{r} 32 \\ + 59 \\ \hline \end{array}$	$\begin{array}{r} 68 \\ + 18 \\ \hline \end{array}$	$\begin{array}{r} 47 \\ + 47 \\ \hline \end{array}$ 	$\begin{array}{r} 18 \\ + 34 \\ \hline \end{array}$
$\begin{array}{r} 29 \\ + 33 \\ \hline \end{array}$	$\begin{array}{r} 57 \\ + 34 \\ \hline \end{array}$	$\begin{array}{r} 88 \\ + 15 \\ \hline \end{array}$	$\begin{array}{r} 14 \\ + 39 \\ \hline \end{array}$	$\begin{array}{r} 79 \\ + 12 \\ \hline \end{array}$
$\begin{array}{r} 49 \\ + 41 \\ \hline \end{array}$	$\begin{array}{r} 62 \\ + 19 \\ \hline \end{array}$	$\begin{array}{r} 29 \\ + 31 \\ \hline \end{array}$ 	$\begin{array}{r} 59 \\ + 39 \\ \hline \end{array}$	$\begin{array}{r} 37 \\ + 48 \\ \hline \end{array}$

2. Choose the correct answer from the given boxes:-

NUMBERS

Match!

 <div style="border: 1px solid black; height: 25px; width: 100%; margin-top: 5px;"></div>	 <div style="border: 1px solid black; height: 25px; width: 100%; margin-top: 5px;"></div>	 <div style="border: 1px solid black; height: 25px; width: 100%; margin-top: 5px;"></div>	 <div style="border: 1px solid black; height: 25px; width: 100%; margin-top: 5px;"></div>	 <div style="border: 1px solid black; height: 25px; width: 100%; margin-top: 5px;"></div>
 <div style="border: 1px solid black; height: 25px; width: 100%; margin-top: 5px;"></div>	 <div style="border: 1px solid black; height: 25px; width: 100%; margin-top: 5px;"></div>	 <div style="border: 1px solid black; height: 25px; width: 100%; margin-top: 5px;"></div>	 <div style="border: 1px solid black; height: 25px; width: 100%; margin-top: 5px;"></div>	 <div style="border: 1px solid black; height: 25px; width: 100%; margin-top: 5px;"></div>
 <div style="border: 1px solid black; height: 25px; width: 100%; margin-top: 5px;"></div>	 <div style="border: 1px solid black; height: 25px; width: 100%; margin-top: 5px;"></div>	 <div style="border: 1px solid black; height: 25px; width: 100%; margin-top: 5px;"></div>	 <div style="border: 1px solid black; height: 25px; width: 100%; margin-top: 5px;"></div>	 <div style="border: 1px solid black; height: 25px; width: 100%; margin-top: 5px;"></div>
 <div style="border: 1px solid black; height: 25px; width: 100%; margin-top: 5px;"></div>	 <div style="border: 1px solid black; height: 25px; width: 100%; margin-top: 5px;"></div>	 <div style="border: 1px solid black; height: 25px; width: 100%; margin-top: 5px;"></div>	 <div style="border: 1px solid black; height: 25px; width: 100%; margin-top: 5px;"></div>	 <div style="border: 1px solid black; height: 25px; width: 100%; margin-top: 5px;"></div>

SIXTEEN

EIGHTY- NINE

TWENTY - FIVE

TWELVE

A HUNDRED

SIXTY - THREE

ELEVEN

EIGHT

FOURTEEN

FIFTY

NINETY- NINE

THIRTEEN

THIRTY - ONE

SIXTY

FORTY

TWENTY

THIRTY- FOUR

SEVENTY

FIFTY - TWO

SEVENTEEN

3.

Comparing numbers up to 100

Grade 2 Place Value Worksheet

Example: $96 > 35$

Compare the numbers. Add: $>$ or $<$ or $=$

1. $26 \underline{\hspace{1cm}} 46$

2. $36 \underline{\hspace{1cm}} 88$

3. $62 \underline{\hspace{1cm}} 82$

4. $89 \underline{\hspace{1cm}} 71$

5. $73 \underline{\hspace{1cm}} 100$

6. $55 \underline{\hspace{1cm}} 46$

7. $66 \underline{\hspace{1cm}} 74$

8. $83 \underline{\hspace{1cm}} 46$

9. $93 \underline{\hspace{1cm}} 62$

10. $98 \underline{\hspace{1cm}} 69$

11. $53 \underline{\hspace{1cm}} 33$

12. $75 \underline{\hspace{1cm}} 45$

13. $37 \underline{\hspace{1cm}} 75$

14. $44 \underline{\hspace{1cm}} 82$

15. $73 \underline{\hspace{1cm}} 90$

16. $36 \underline{\hspace{1cm}} 53$

17. $17 \underline{\hspace{1cm}} 56$

18. $21 \underline{\hspace{1cm}} 92$

E.Vs

Q1. Make a list of 10 fruits and vegetables available in summer and winter.

Fruits

1. _____
2. _____
3. _____
4. _____
5. _____
6. _____
7. _____
8. _____
9. _____
10. _____

Vegetables

1. _____
2. _____
3. _____
4. _____
5. _____
6. _____
7. _____
8. _____
9. _____
10. _____

Q2. Write the names on a given pictures.

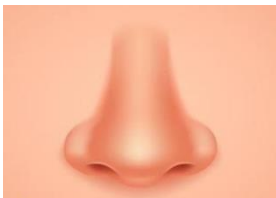
[Eyes , Nose , Ear , Face]



1.



2.



3.



4.

Q 3. Unjumble the words on the given pictures.



Q4. On a white chart paper make a colourful palmprint 🖐 of your family members and mention their names.



Q 5. Match the following. Animals with their sounds.



1. _____

Dog

Neigh



2.

Cat

Barks



3. _____

Tiger

Trumpet



4.

Elephant

Meow



5. _____

Horse

Roars

